

6th grade Summer Reading Project 2019

Name _____

Welcome to 6th grade! For your summer reading project, you will be reading the book *The Pharaoh's Daughter* by Julius Lester. You are responsible for reading the whole book and creating a **Chips and Salsa Visual Tool** in order to track the character development throughout the book.

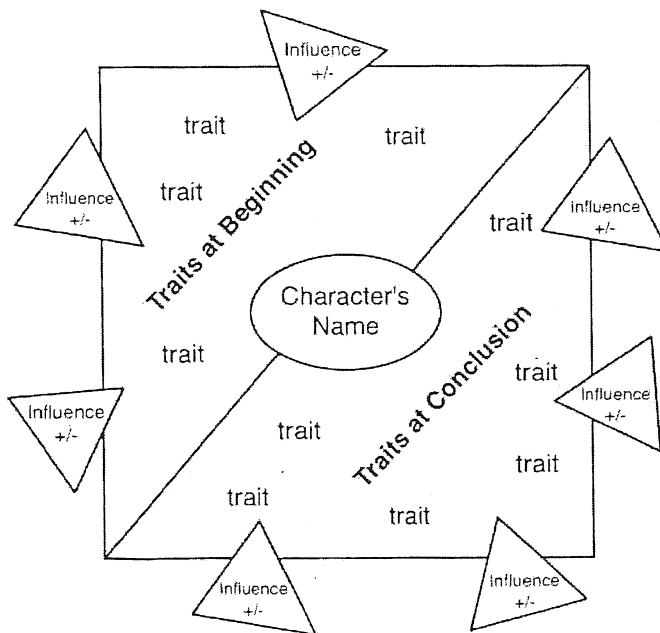
Choose one of the main characters to follow their development from the beginning of the book to the end. In your visual tool, you must include:

- 3 events/influences from the beginning (what the character experienced or actions they took that impacts who they are, answering the "why" the character is the way they are)
- 3 adjectives/ character traits about character at the beginning (can either be physical or personality traits; for ex. the character is smart because they went to school or the character likes to play basketball because they are good at it and they are tall)
- 3 events/influences from the end (focus on how the character has changed throughout the book; for example, they were shy in the beginning because they didn't have any friends, but became a lot more outgoing because they met some people that they could be friends with; meeting the friends would be the influence, and outgoing would be the trait)
- 3 adjectives/ character traits about character at the end (how would you describe the character by the end of the book)

You will then be responsible for writing a **one-paragraph (at least 5 sentence) description** of the ways that the main character changed throughout the book, using your visual tool as your guide. **This project will be done on a normal, 8.5 x 11 piece of paper (visual tool on one side, paragraph on the other).**

This project must be turned in on the first day of school, Tuesday, September 3rd, with this rubric page attached. You will also be **quizzed** on the events of the book when you return.

Please refer to the rubric and evaluate yourself to make sure you included all components of the project. As a reminder, plagiarism is taken very seriously at our school and projects will receive **zero credit** if plagiarism is detected.



Name _____

Category	10-8 Excellence	7-5 Average	4-3 Basic	2-1 Insufficient
Grammar and Spelling	0-1 errors in grammar and spelling	2-4 errors in grammar and spelling	5-7 errors in grammar and spelling	8 or more errors in grammar and spelling
Written Presentation	Neatly written or typed with no distractions	Neatly written or typed with 1-2 distractions	Generally readable but there are more than 3 cross-outs	Many words are unreadable or more than 5 cross-outs
Content	All traits and influences clearly connect to the book/character and are presented with excellent organization	Most traits and influences clearly connect to the book/character and are presented with excellent organization	Some traits and influences clearly connect to the book/character and are presented with excellent organization	Traits and influences are confusing and do not connect to the book/character; lacks organization
Direction Completion (rubric attached is worth 2 points)	Excellent completion of directions and all elements are in the project (and rubric is attached)	Above average completion of directions and elements are in the project (and rubric is attached)	Average completion of directions and most elements are in the project (and rubric is attached)	Completion of directions is not evident and more than two elements are missing
Creativity	Excellent creativity evident and enhances communication of facts	Above average creativity evident and enhances communication of facts	Creativity evident and enhances communication of facts	Limited creativity that somewhat helps in the communication of facts
Overall Grade	/50			

**Rubric must be STAPLED to your project when you turn it in on September 3rd!

Incoming 6th grade Summer Math packet

Name _____


Date _____

1. What is the expanded form of 68, 025?

- a) $60,000 + 800 + 25$
- b) $60,000 + 8000 + 20 + 5$
- c) $60,000 + 80000 + 20 + 5$
- d) $60,000 + 8000 + 200 + 5$

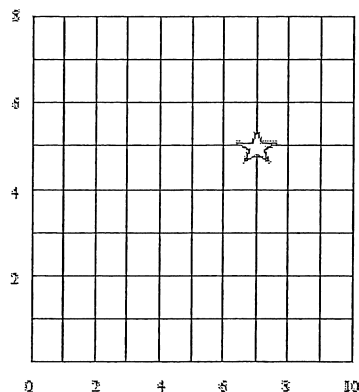
2. Joy kept her toys in the storage container shown below. What is the volume of the storage container?

- a) 8 ft^3
- b) 9 ft^3
- c) 14 ft^3
- d) 24 ft^3



3. What are the coordinates of the star?

- a) (7, 5)
- b) (6, 8)
- c) (5, 7)
- d) (6, 6)



Name _____

Date _____


4. After hosting a party, Chloe has $3\frac{1}{8}$ pizzas left. She gives Joseph $1\frac{1}{2}$ pizzas for helping her clean up. How much pizza does Chloe have left after giving Joseph pizza?

a) $2\frac{2}{10}$ pizzas

b) $1\frac{5}{8}$ pizzas

c) $2\frac{1}{2}$ pizzas

d) $1\frac{3}{8}$ pizzas



5. Which of the following numbers would make the equation shown below correct?

$$5 \times (13 - \underline{\quad}) \div 2 = 15$$

a) 1

b) 5

c) 7

d) 9




Name _____

Date _____

6. Gabriela measured the distance from her school to the park using a map. The map's scale states that 1 centimeter = 25 meters. If Gabriela's measurement showed that the school was 13 centimeters from the park, what is the distance in meters?

- a) 12 meters
- b) 38 meters
- c) 225 meters
- d) 325 meters



7. What shape has four sides and only one pair of parallel lines?

- a) trapezoid
- b) rhombus
- c) parallelogram
- d) hexagon

8. What is 823.871 rounded to the nearest tenth?


- a) 824
- b) 823.9
- c) 823.87
- d) 800.8



Name _____

Date _____

9. The line plot below shows the distance (rounded to the nearest whole number) of model cars students used for a science experiment measuring speed.



Based on the data, how many students' cars traveled less than 200 centimeters?

- a) 3
- b) 8
- c) 12
- d) 15

10. What is the expression represented by the following statement:

Divide 18 by 3, multiply by 2 and then subtract 7.

- a) $2 \times 18 \div 3 - 7$
- b) $18 \div (3 \times 2) - 7$
- c) $18 - 7 \div 3 \times 2$
- d) $18 \div 3 \times 2 - 7$



Name _____

Date _____

11. Enid feeds her cat the same amount of food each week. She started recording the total amount of food the cat ate, displayed in the table below.

Week	Amount of cat food (in pounds)
1	3
3	6
5	9
7	12

How many pounds of food will Enid's cat have eaten after 10 weeks?

- a) 15 pounds
- b) 16.5 pounds
- c) 17.5 pounds
- d) 18 pounds

12. What is the product of $6 \times \frac{5}{7}$?

- a) $\frac{5}{42}$
- b) $1\frac{4}{7}$
- c) $4\frac{2}{7}$
- d) $8\frac{2}{5}$



Name _____


Date _____

13. Kate wants to buy a new video game. The game cost \$76.00. Kate's parents give her \$5.00 in allowance each week. If she saves \$4.00 each week, how many weeks will it take her to save \$76.00?

- a) 9 weeks
- b) 15 weeks
- c) 16 weeks
- d) 19 weeks

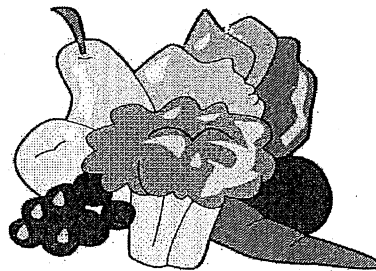
14. Mr. Lowe is setting up his room for art class. He has 5 boxes of crayons with 24 crayons each, 3 packages of pencils with 20 pencils each, and 8 packages of paint brushes with 10 brushes each. What is the difference between the total number of crayons and the total number of paint brushes?

- a) 3
- b) 14
- c) 40
- d) 80



15. The Canton Grocery Store decides to give away 300 pounds of vegetables as a part of a campaign to get people to eat more vegetables. If 58 people get an equal amount of vegetables, how many remaining pounds will Canton have to give away?

- a) 10 pounds
- b) 52 pounds
- c) 242 pounds
- d) 290 pounds



Name _____

Date _____

16. What is the quotient of $63.72 \div 4$? Enter your answer in the box.

17. Look at the corresponding numbers in the pattern below used to form ordered pairs.

Rule One: add 5	5	10	15
Rule One: add 6	6	12	18

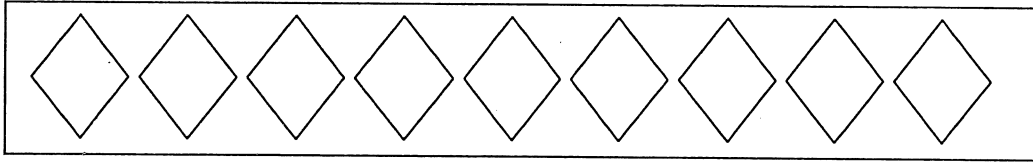
If $(0, 0)$ is the first ordered pair, what is the sixth ordered pair? Write your answer in the box.



Name _____

Date _____

18. Represent the fraction $\frac{4}{9}$ by shading the diamonds to represent the numerator.




Refer to the statement below for numbers 19 and 20.

During a match, an average tennis player should be able to hit $\frac{2}{5}$ of his or her first serves within the service lines.

19. If Sam takes 150 serves during a match, how many serves did he hit within the service lines? Write your answer in the space provided.

Answer



20. If Sam hits 90 serves within the service lines during his next match, how many serves did he attempt? Write your answer in the space provided.

Answer

